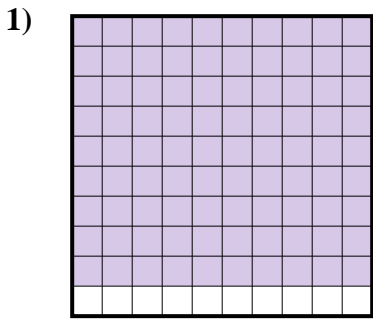


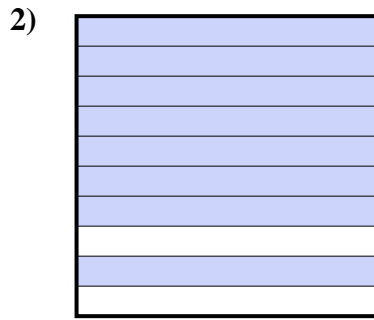


Determine which letter best represents the amount shaded of the whole.

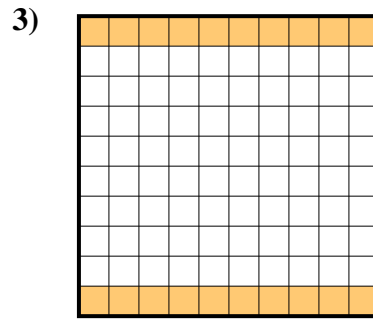
Answers



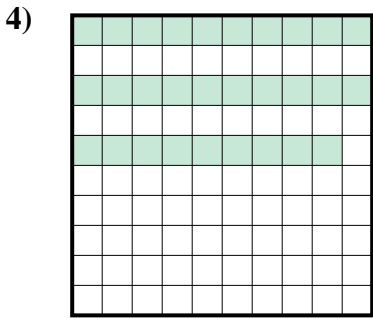
- A. 90
- B. 900.0
- C. 0.9
- D. 9



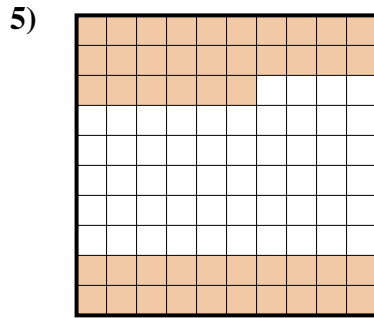
- A. 8
- B. 0.8
- C. 800.0
- D. 0.08




- A. 2
- B. 200.0
- C. 0.2
- D. 20




- A. 0.029
- B. 29
- C. 0.29
- D. 290.0



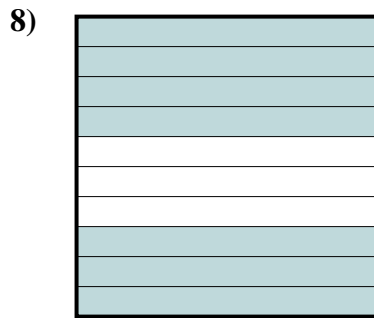
- A. 0.46
- B. 460.0
- C. 46
- D. 4.6



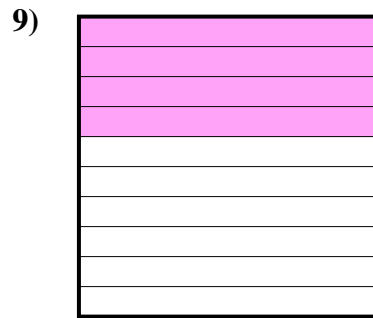
- A. 0.02
- B. 200.0
- C. 2
- D. 0.2



- A. 10
- B. 0.1
- C. 1
- D. 100.0



- A. 0.07
- B. 700.00
- C. 0.7
- D. 7



- A. 0.4
- B. 0.04
- C. 40
- D. 4

1. _____

2. _____

3. _____

4. _____

5. _____

6. _____

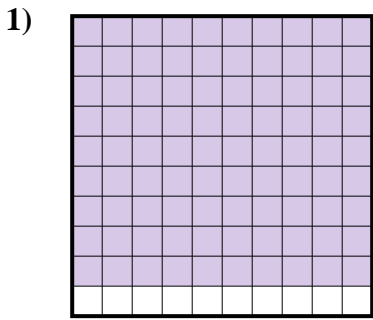
7. _____

8. _____

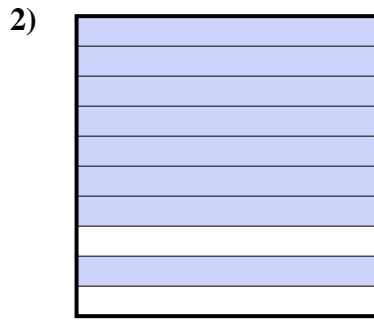
9. _____



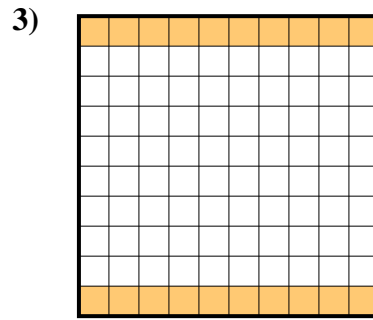
Determine which letter best represents the amount shaded of the whole.



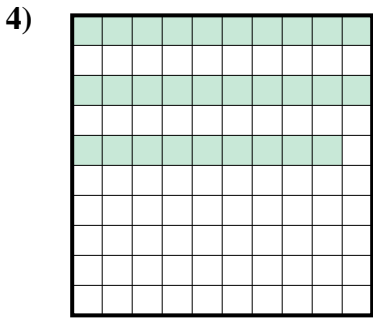
- A. 90
- B. 900.0
- C. 0.9
- D. 9



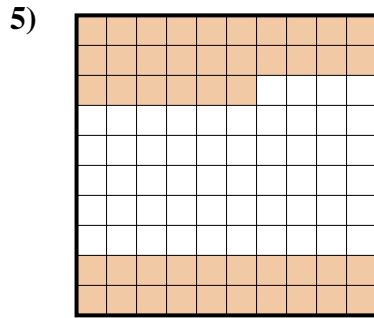
- A. 8
- B. 0.8
- C. 800.0
- D. 0.08




- A. 2
- B. 200.0
- C. 0.2
- D. 20




- A. 0.029
- B. 29
- C. 0.29
- D. 290.0



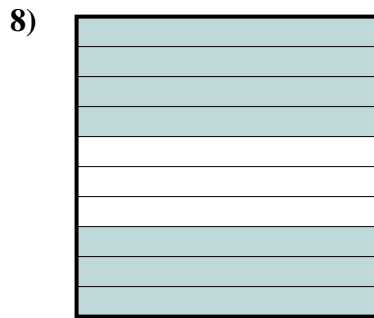
- A. 0.46
- B. 460.0
- C. 46
- D. 4.6



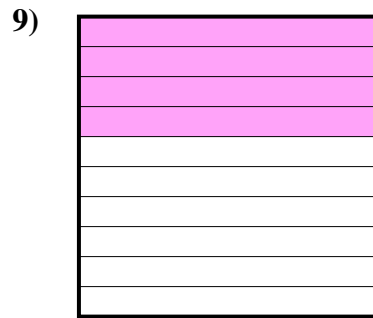
- A. 0.02
- B. 200.0
- C. 2
- D. 0.2



- A. 10
- B. 0.1
- C. 1
- D. 100.0



- A. 0.07
- B. 700.00
- C. 0.7
- D. 7



- A. 0.4
- B. 0.04
- C. 40
- D. 4

Answers

- 1. **C**
- 2. **B**
- 3. **C**
- 4. **C**
- 5. **A**
- 6. **D**
- 7. **B**
- 8. **C**
- 9. **A**